


How Many Spots

On The Ladybug?

A Counting Booklet

By

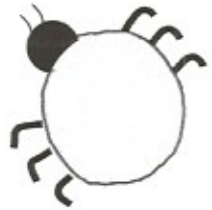


There is 1 black spot on the ladybug.

1 one

black


1 2 3 4 5 6 7 8 9 10



There are 2 black spots on the ladybug.

2 two


1 2 3 4 5 6 7 8 9 10



There are 3 black spots on the ladybug.

3 three

1 2 3 4 5 6 7 8 9 10



There are 4 black spots on the ladybug.

4 four

1 2 3 4 5 6 7 8 9 10



There are 5 black spots on the ladybug.

5 five

1 2 3 4 5 6 7 8 9 10



There are 6 black spots on the ladybug.

6 six

1 2 3 4 5 6 7 8 9 10



There are 7 black spots on the ladybug.

7 seven

1 2 3 4 5 6 7 8 9 10



There are 8 black spots on the ladybug.

8 eight

1 2 3 4 5 6 7 8 9 10



There are 9 black spots on the ladybug.

9 nine

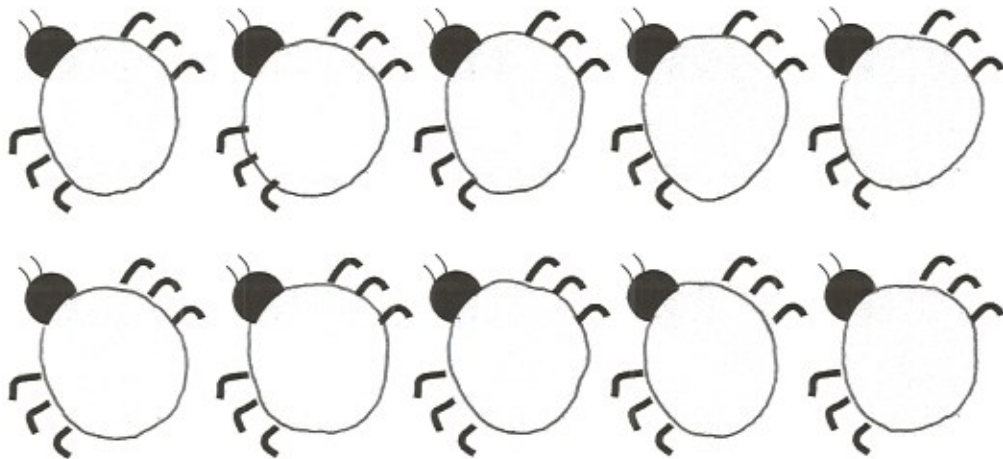
1 2 3 4 5 6 7 8 9 10



There are 10 black spots on each of the 10 ladybugs.

10 ten

1 2 3 4 5 6 7 8 9 10



Count the black spots on the 10 ladybugs by 10's.
How many black spots are there?

100 one hundred

10 20 30 40 50 60 70 80 90 100

Wow! Those ladybugs "gotta" "lotta" spots!