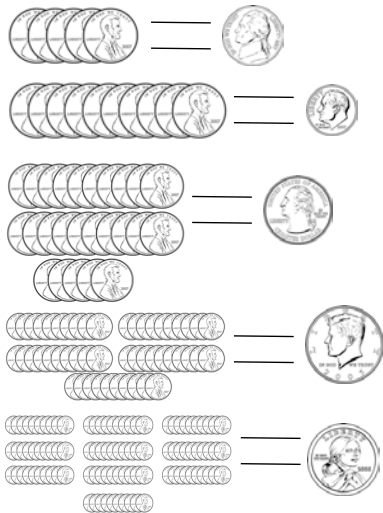


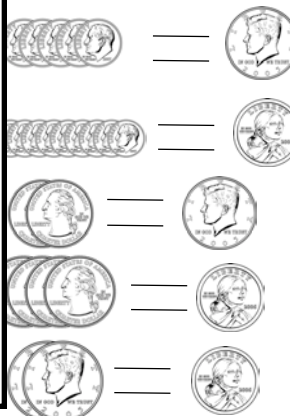
How many pennies?

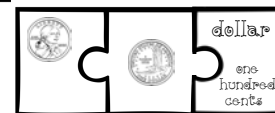
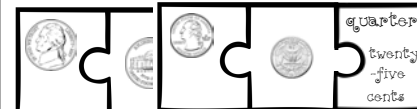


I Spy
A Coin!

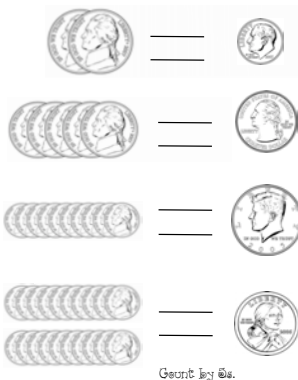


How many?



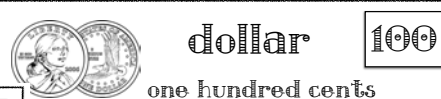
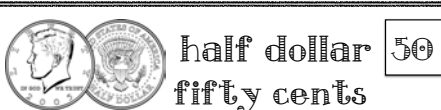
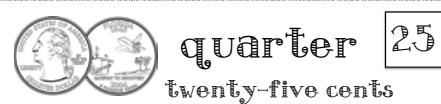


How many nickels?





I Spy
A Coin!



quarter = twenty-five cents

Congratulations!

can identify these coins.



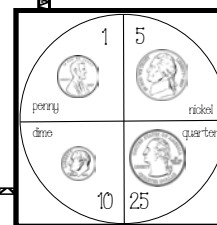
Teacher:
Date:

Congratulations!


can identify these coins.



Teacher:
Date:



Roll and color. How many coins can you color before the timer rings?



How many did you color?

Pennies:

Nickels:

Dimes:

Quarters:

Total number of coins filled in:

penny
one cent

1

nickel
five cents

5

dime
ten cents

10