



Where Have All The  
Snowmen Gone?

©TeachWithMe.com



Where Have All The  
Snowmen Gone?

©TeachWithMe.com

$$5 - 1 = 4$$

$$\begin{array}{r} 5 \\ - 1 \\ \hline \end{array}$$



**There were 5 snowmen standing in the sun.  
One disappeared. That left 4.**

2

$$5 - 1 = 4$$

$$\begin{array}{r} 5 \\ - 1 \\ \hline \end{array}$$




**There were 5 snowmen standing in the sun.  
One disappeared. That left 4.**

2



**There were 4 snowmen standing in the sun.  
One disappeared. That left 3.**

2



**There were 4 snowmen standing in the sun.  
One disappeared. That left 3.**

2

$$3 - 1 = 2$$

$$\begin{array}{r} 3 \\ - 1 \\ \hline \end{array}$$



**There were 3 snowmen standing in the sun.  
One disappeared. That left 2.**

4

$$3 - 1 = 2$$

$$\begin{array}{r} 3 \\ - 1 \\ \hline \end{array}$$



**There were 3 snowmen standing in the sun.  
One disappeared. That left 2.**

4

$$2 - 1 = 1$$

2



**There were 2 snowmen standing in the sun.  
One disappeared. That left 1.**

5

$$2 - 1 = 1$$

2



**There were 2 snowmen standing in the sun.  
One disappeared. That left 1.**

5




There was 1 snowman standing in the sun.  
He disappeared. That left 0.  
Where have all the snowmen gone?

6



There was 1 snowman standing in the sun.  
He disappeared. That left 0.  
Where have all the snowmen gone?


6



**They MELTED under the sun.  
That's why there's none!**



7



**They MELTED under the sun.  
That's why there's none!**



7