

How Much Are These Shamrocks?

By: Diane



©TeachWithMe.com

The leprechaun wants to buy some shamrocks.  
Cut out the coins and glue them to the appropriate pages.  
Color the shamrocks.

2



This shamrock cost .1 cent.  
He needs a penny.



penny penny

3



This shamrock costs 5 cents.  
He needs a nickel.

nickel nickel

4



This shamrock costs 10 cents.  
He needs a dime.

dime dime

5



This shamrock costs 25 cents.  
He needs a quarter.

quarter  
quarter

6



This shamrock cost \$1.00  
He needs a dollar.

dollar dollar

List 2 combinations of coins that  
the leprechaun could use to buy it?

4 quarters  
3 quarters, 2 dimes, 1 nickel




How Much Are These Shamrocks?

By: \_\_\_\_\_




©TeachWithMe.com


The leprechaun wants to buy some shamrocks.  
Cut out the coins and glue them to the appropriate pages.  
Color the shamrocks.



This shamrock cost .1 cent.  
He needs a penny.



penny





This shamrock costs 5 cents.  
He needs a nickel.

nickel

---

---

---





This shamrock costs 10 cents.  
He needs a dime.

dime

---


---

---



This shamrock costs 25 cents.  
He needs a quarter.

quarter



This shamrock cost \$1.00  
He needs a dollar.

dollar

List 2 combinations of coins that  
the leprechaun could use to buy it?





Cut & glue to matching #'d Boxes in booklet.