




WHERE HAVE ALL THE  
LEAVES GONE?

©TeachWithMe.com



WHERE HAVE ALL THE  
LEAVES GONE?

©TeachWithMe.com



There were 5 leaves.

1 disappeared. That left 4.

$$\begin{array}{r} 5 \\ - 1 \\ \hline \end{array}$$

$$5 - 1 = 4$$




There were 5 leaves.

1 disappeared. That left 4.

$$\begin{array}{r} 5 \\ - 1 \\ \hline \end{array}$$

$$5 - 1 = 4$$



There were 4 leaves.  
1 disappeared. That left 3.

$$\begin{array}{r} 4 \\ - 1 \\ \hline \end{array}$$


$$4 - 1 = 3$$



There were 4 leaves.  
1 disappeared. That left 3.

$$\begin{array}{r} 4 \\ - 1 \\ \hline \end{array}$$

$$4 - 1 = 3$$



There were 3 leaves.  
1 disappeared. That left 2.

$$3 - 1 = 2$$

$$\begin{array}{r} 3 \\ - 1 \\ \hline \end{array}$$



There were 3 leaves.  
1 disappeared. That left 2.

$$3 - 1 = 2$$

$$\begin{array}{r} 3 \\ - 1 \\ \hline \end{array}$$



There were 2 leaves.  
1 disappeared. That left 1.

$$2 - 1 = 1$$

$$\begin{array}{r} 2 \\ - 1 \\ \hline \end{array}$$



There were 2 leaves.  
1 disappeared. That left 1.

$$2 - 1 = 1$$


$$\begin{array}{r} 2 \\ - 1 \\ \hline \end{array}$$



There was 1 leaf.

It disappeared. That left 0.

Where have all the leaves gone?




$$1 - 1 = 0$$



There was 1 leaf.

It disappeared. That left 0.

Where have all the leaves gone?



$$1 - 1 = 0$$

# The wind blew them away!



Circle 5 leaves blowing in the wind.

# The wind blew them away!



Circle 5 leaves blowing in the wind.