


Where Have All The Kites Gone?

©TeachWithMe.com



Where Have All The Kites Gone?

©TeachWithMe.com



There were 5 kites.  
1 disappeared. That left 4.

$$5 - 1 = 4$$


$$\begin{array}{r} 5 \\ - 1 \\ \hline \end{array}$$



There were 5 kites.  
1 disappeared. That left 4.

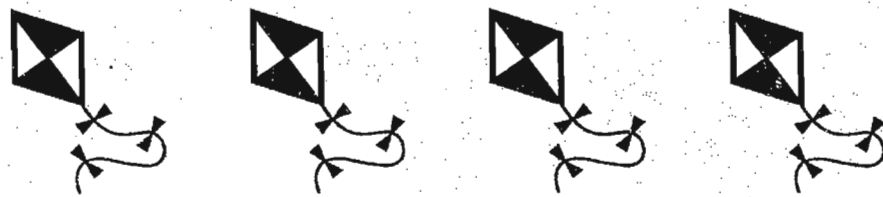

$$5 - 1 = 4$$

$$\begin{array}{r} 5 \\ - 1 \\ \hline \end{array}$$




There were 4 kites.  
1 disappeared. That left 3.

$$4 - 1 = 3$$



There were 4 kites.  
1 disappeared. That left 3.

$$4 - 1 = 3$$






There were 3 kites.  
1 disappeared. That left 2.

$$3 - 1 = 2$$


$$\begin{array}{r} 3 \\ - 1 \\ \hline \end{array}$$



There were 3 kites.  
1 disappeared. That left 2.

$$3 - 1 = 2$$

$$\begin{array}{r} 3 \\ - 1 \\ \hline \end{array}$$



There were 2 kites.  
1 disappeared. That left 1.

$$2 - 1 = 1$$

$$\begin{array}{r} 2 \\ - 1 \\ \hline 1 \end{array}$$



There were 2 kites.  
1 disappeared. That left 1.

$$2 - 1 = 1$$

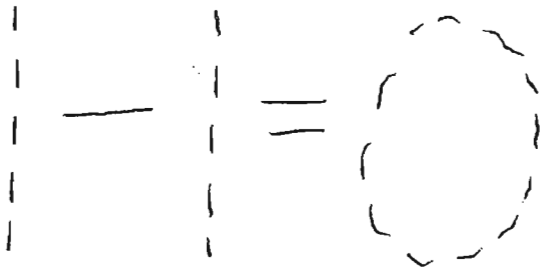
$$\begin{array}{r} 2 \\ - 1 \\ \hline 1 \end{array}$$



There was 1 kite left.

It disappeared. That left 0.

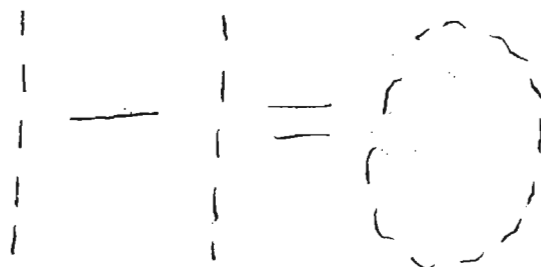
What happened to all of the kites?



There was 1 kite left.

It disappeared. That left 0.

What happened to all of the kites?





They left to go fly in the  
Japanese Kite parade!



They left to go fly in the  
Japanese Kite parade!

