


C	o	u	n	t	i	n	g		
T	o								
100									
			A		F	i	l	l	
I	n		T	h	e				
B	l	a	n	k		B	o	o	k





	2	3			6			9	
	12			15		17			20
		23		25	26		28		
31			34			37			
41	42			45		47			
51			54		56			59	
		63	64		66			69	
			74			77			80
	82			85			88	89	
	92			95		97			




Directions: Fill in the missing numbers.



	2		4		6			9	
		13		16					20
			24		26			29	
31		33		35				39	
41		43			46		48		
	52		54			57		59	
		63			66			69	
	72			75		77			80
		83			86			89	
91			94	95			98		



Directions: Fill in the missing numbers. .



1		3		5	6				10
11	12		14			17		19	
		23		25	26		28		
31			34		36	37		39	
	42			45		47			50
51		53			56		58		
	62		64	65		67		68	
		73					78		80
	82			85		87		89	
91			94		96			99	



Directions: Fill in the missing numbers. .




1		3		5		7			10
	12		14			17		19	
		23	24				28		30
	32		34		36			39	
41				45		47			
	52		54		56				
		63		65				69	
	72		74			77	78		
81		83			86			89	
91			94			97			




Directions: Fill in the missing numbers. .



	2		4	5			8		
11		13		15					20
	22				26		28		30
		33	34			37		39	
41					46		48		
	52			55		57		59	
61		63			66		68		
	72		74			77			80
	82	83					87	89	
91				95	96				



Directions: Fill in the missing numbers. .




1								9	
	12					17			
		23			26				
	32							39	
41					46				
	52					57			
61					66				
			74						80
		83					87		
91					96				



Directions: Fill in the missing numbers.





		3					8		
11				15					
	22				26				
		33						39	
	42				46				
51						57			
		63			66				
			74						80
				84			87		
	92				96				



Directions: Fill in the missing numbers.






	2			5					
11					16				
	22						28		
		33						39	
41					46				
			54			57			
		63							70
			74						
81							88		
	92							99	




Directions: Fill in the missing numbers.






			4				8		
11						17			
		23					28		
31								39	
	42								
51						57			
		63							70
				75					
			84						
		93							



Directions: Fill in the missing numbers.







1									
									10
							28		
	31								
			44						
51									
				65					
						77			
		83							
								99	



Directions: Fill in the missing numbers. .



1									
									100



Directions: Fill in the missing numbers. .

<b>1</b>									
									<b>100</b>

Directions: Fill in the missing numbers. .